

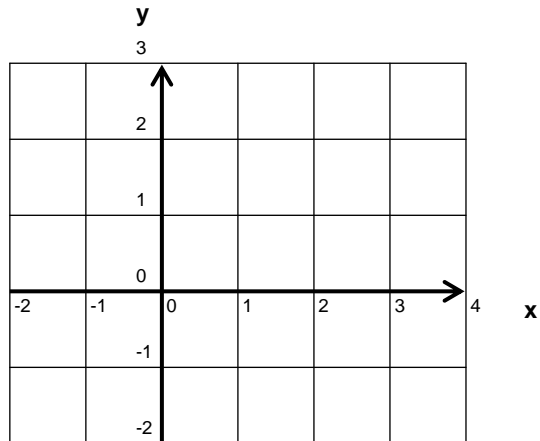
NOM :  
Prénom :

**EXERCICES**  
**SYSTEMES**

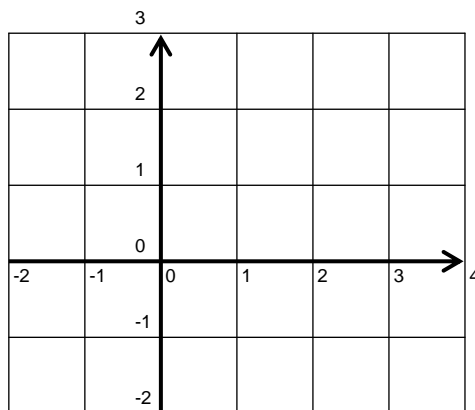
le ... / ... / .....  
Classe:

**Résoudre les systèmes suivants en utilisant une méthode algébrique et la méthode graphique :**

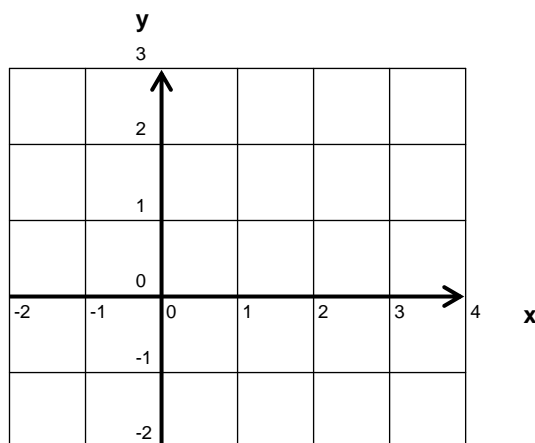
$$\begin{cases} x - y = -1 \\ x + y = 3 \end{cases}$$



$$\begin{cases} x + y = 3 \\ 3x - y = 1 \end{cases}$$



$$\begin{cases} x - y = 1 \\ 0,5x + y = 2 \end{cases}$$

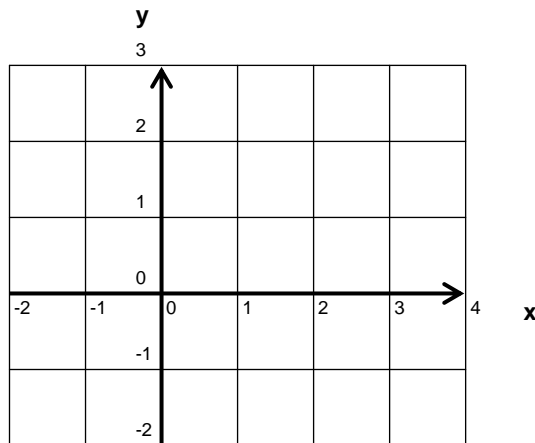


NOM :  
Prénom :

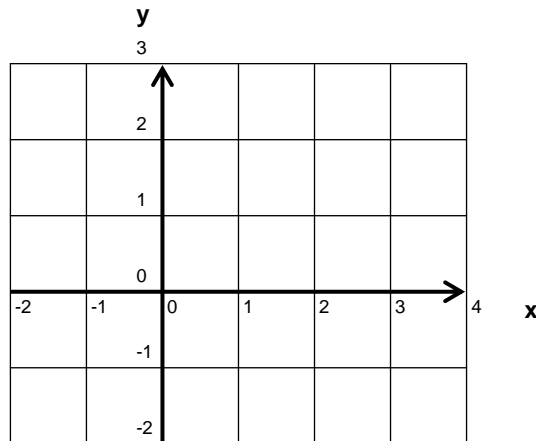
**EXERCICES  
SYSTEMES**

le ... / ... / .....  
Classe:

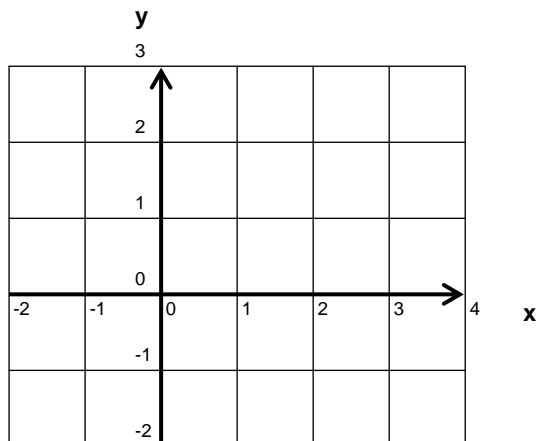
$$\begin{cases} x + y = 2 \\ 2x + 3y = 3 \end{cases}$$



$$\begin{cases} 3x - 2y = 1 \\ -x + y = -1 \end{cases}$$



$$\begin{cases} 2x - y = 1 \\ 2x - 2y = 1 \end{cases}$$



$$\begin{cases} 2x + y = 5 \\ -x + y = 2 \end{cases}$$

$$\begin{cases} x + y = 3 \\ -2x + y = -6 \end{cases}$$

$$\begin{cases} -x + y = -2 \\ 2x + y = 1 \end{cases}$$

$$\begin{cases} x - 3y = -6 \\ 4x + 5y = 27 \end{cases}$$